



Autumn Ratios (E)


Find each ratio and simplify, if necessary.



$$\begin{array}{l}
 \text{Tree} : \text{Maple Leaf} = \quad : \quad = \quad : \quad \\
 \text{Maple Leaf} : \text{Tree} = \quad : \quad = \quad : \quad
 \end{array}$$



$$\begin{array}{l}
 \text{Green Branch} : \text{Oak Leaf} = \quad : \quad = \quad : \quad \\
 \text{Oak Leaf} : \text{Green Branch} = \quad : \quad = \quad : \quad
 \end{array}$$




$$\begin{array}{l}
 \text{Oak Leaf} : \text{Maple Leaf} = \quad : \quad = \quad : \quad \\
 \text{Maple Leaf} : \text{Oak Leaf} = \quad : \quad = \quad : \quad
 \end{array}$$



$$\begin{array}{l}
 \text{Green Branch} : \text{Maple Leaf} = \quad : \quad = \quad : \quad \\
 \text{Maple Leaf} : \text{Green Branch} = \quad : \quad = \quad : \quad
 \end{array}$$


Autumn Ratios (E) Answers

Find each ratio and simplify, if necessary.




$$\text{tree} : \text{leaf} = 1 : 9 = 1 : 9$$

$$\text{leaf} : \text{tree} = 9 : 1 = 9 : 1$$



$$\text{branch} : \text{oak leaf} = 5 : 6 = 5 : 6$$

$$\text{oak leaf} : \text{branch} = 6 : 5 = 6 : 5$$



$$\text{oak leaf} : \text{maple leaf} = 9 : 3 = 3 : 1$$

$$\text{maple leaf} : \text{oak leaf} = 3 : 9 = 1 : 3$$



$$\text{branch} : \text{maple leaf} = 6 : 2 = 3 : 1$$

$$\text{maple leaf} : \text{branch} = 2 : 6 = 1 : 3$$