



Autumn Ratios (E)


Find each ratio and simplify, if necessary.



$$\begin{array}{l}
 \text{Tree} : \text{Leaf} = \quad : \quad = \quad : \quad \\
 \text{Leaf} : \text{Tree} = \quad : \quad = \quad : \quad
 \end{array}$$



$$\begin{array}{l}
 \text{Green Branch} : \text{Oak Leaf} = \quad : \quad = \quad : \quad \\
 \text{Oak Leaf} : \text{Green Branch} = \quad : \quad = \quad : \quad
 \end{array}$$



$$\begin{array}{l}
 \text{Oak Leaf} : \text{Maple Leaf} = \quad : \quad = \quad : \quad \\
 \text{Maple Leaf} : \text{Oak Leaf} = \quad : \quad = \quad : \quad
 \end{array}$$



$$\begin{array}{l}
 \text{Green Branch} : \text{Maple Leaf} = \quad : \quad = \quad : \quad \\
 \text{Maple Leaf} : \text{Green Branch} = \quad : \quad = \quad : \quad
 \end{array}$$