



Autumn Ratios (H)


Find each ratio and simplify, if necessary.




$$\begin{array}{l} \text{leaf} : \text{maple} = \quad : \quad = \quad : \quad \\ \text{maple} : \text{leaf} = \quad : \quad = \quad : \quad \end{array}$$



$$\begin{array}{l} \text{maple} : \text{tree} = \quad : \quad = \quad : \quad \\ \text{tree} : \text{maple} = \quad : \quad = \quad : \quad \end{array}$$



$$\begin{array}{l} \text{leaf} : \text{maple} = \quad : \quad = \quad : \quad \\ \text{maple} : \text{leaf} = \quad : \quad = \quad : \quad \end{array}$$



$$\begin{array}{l} \text{tree} : \text{leaf} = \quad : \quad = \quad : \quad \\ \text{leaf} : \text{tree} = \quad : \quad = \quad : \quad \end{array}$$