






Constructing Midpoints (B)

Name: _____

Date: _____

Construct the midpoint on each line segment.



Constructing Midpoints (B) Answers

Name: _____

Date: _____

Construct the midpoint on each line segment.

