





Constructing Midpoints (C)

Name: _____

Date: _____

Construct the midpoint on each line segment.



Constructing Midpoints (C) Answers

Name: _____

Date: _____

Construct the midpoint on each line segment.

