






Constructing Midpoints (G)

Name: _____

Date: _____

Construct the midpoint on each line segment.



Constructing Midpoints (G) Answers

Name: _____

Date: _____

Construct the midpoint on each line segment.

