






Constructing Midpoints (I)

Name: _____

Date: _____

Construct the midpoint on each line segment.



Constructing Midpoints (I) Answers

Name: _____

Date: _____

Construct the midpoint on each line segment.

