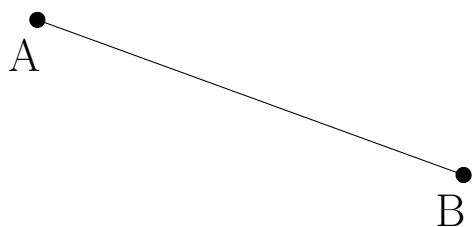


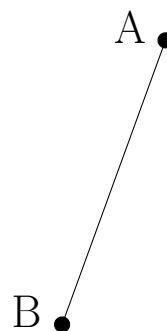
Perpendicular Bisectors (B)

Construct the perpendicular bisector for each line segment.

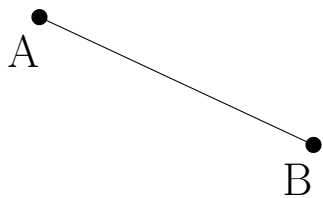
1.



2.



3.



4.

