






Perpendicular Bisectors (B)

Name: _____

Date: _____

Construct the perpendicular bisector on each line segment.



Perpendicular Bisectors (B) Answers

Name: _____

Date: _____

Construct the perpendicular bisector on each line segment.

