






Perpendicular Bisectors (C)

Name: _____

Date: _____

Construct the perpendicular bisector on each line segment.



Perpendicular Bisectors (C) Answers

Name: _____

Date: _____

Construct the perpendicular bisector on each line segment.

