


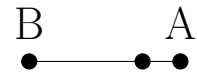
Perpendicular Lines (D)

Construct a line perpendicular to the segment through the unlabeled point.

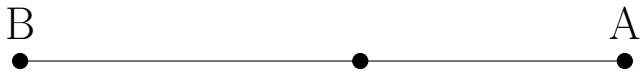
1.



2.



3.



4.

