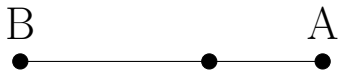


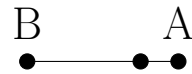
# Perpendicular Lines (E)

Construct a line perpendicular to the segment through the unlabeled point.

1.



2.



3.



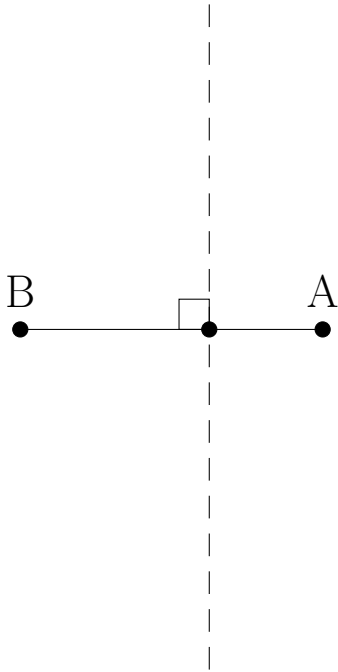
4.



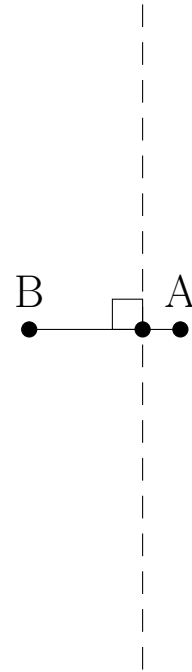
# Perpendicular Lines (E) Answers

Construct a line perpendicular to the segment through the unlabeled point.

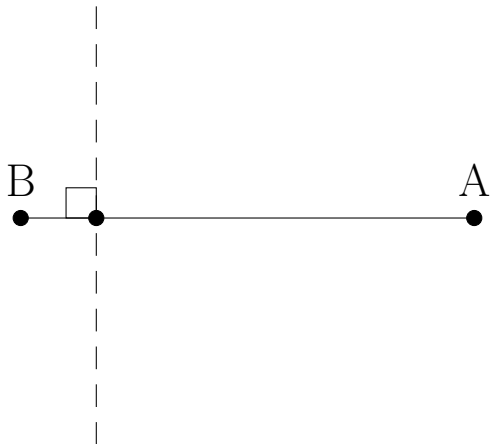
1.



2.



3.



4.

