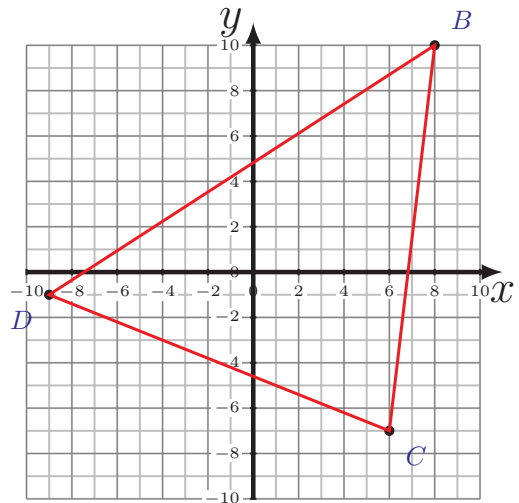
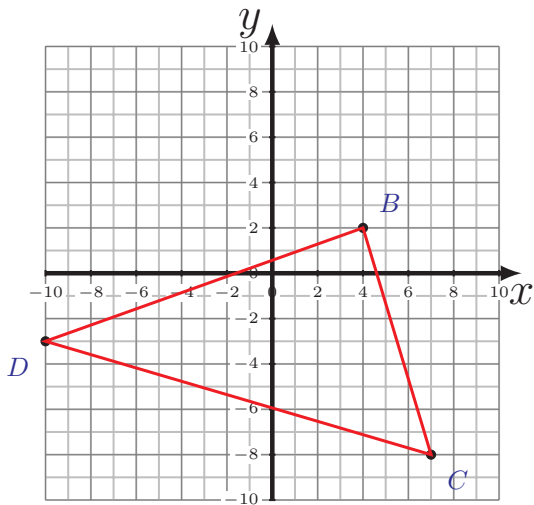
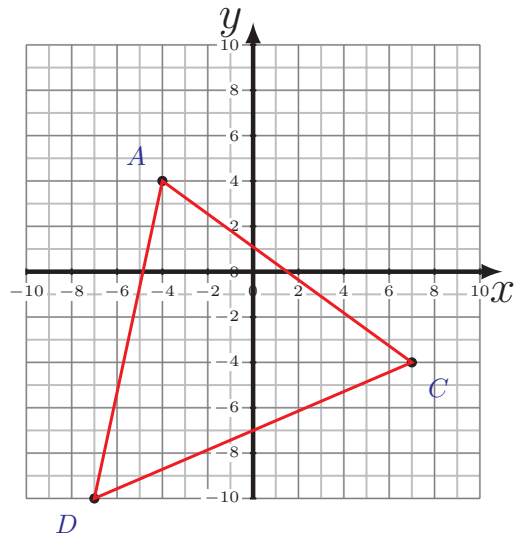
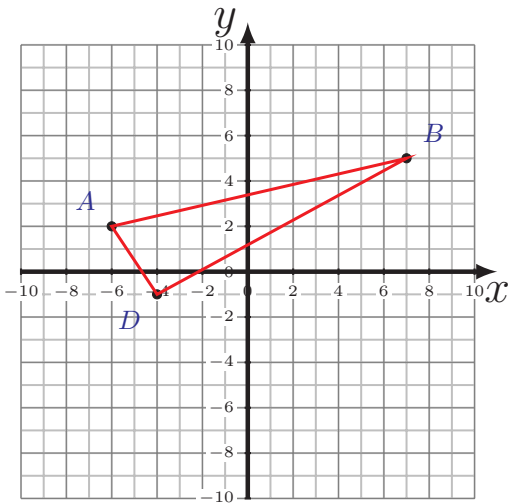


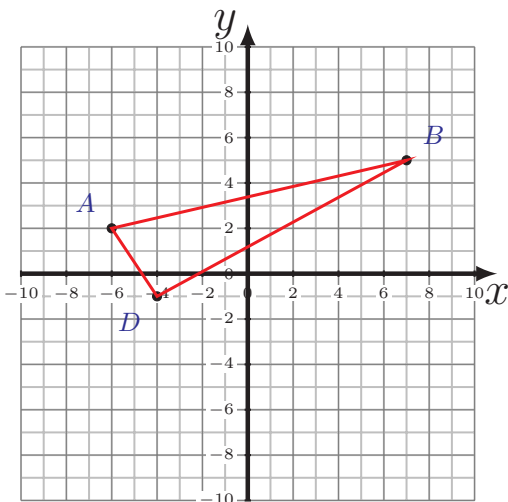
Perimeter and Area of Triangles (A)

Calculate the perimeter and area of each triangle.



Perimeter and Area of Triangles (A) Answers

Calculate the perimeter and area of each triangle.

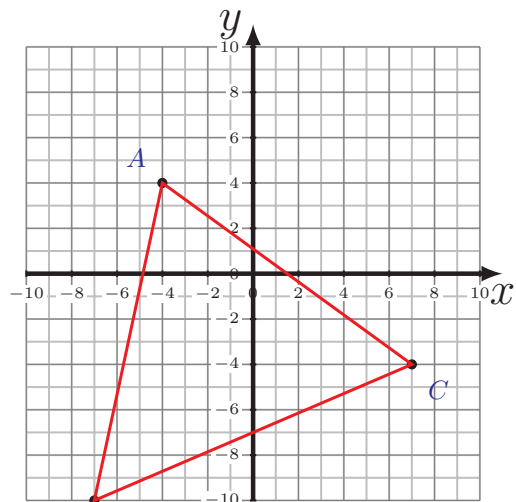


$$\overline{AB} = 13.34 \text{ u} \quad \overline{BD} = 12.53 \text{ u}$$

$$\overline{DA} = 3.61 \text{ u}$$

$$P = 29.48 \text{ u}$$

$$A = 22.5 \text{ u}^2$$



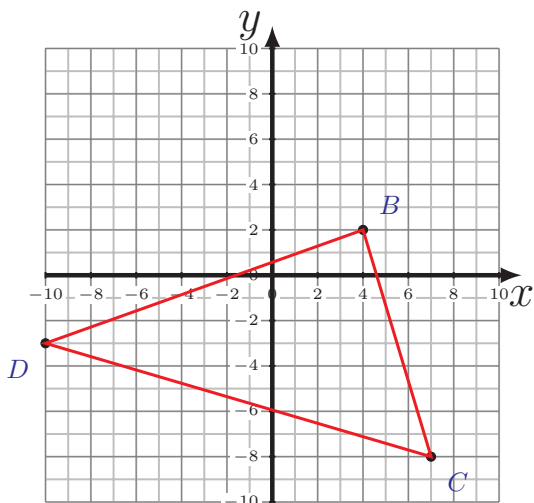
D

$$\overline{AC} = 13.6 \text{ u}$$

$$\overline{CD} = 15.23 \text{ u} \quad \overline{DA} = 14.32 \text{ u}$$

$$P = 43.15 \text{ u}$$

$$A = 89 \text{ u}^2$$

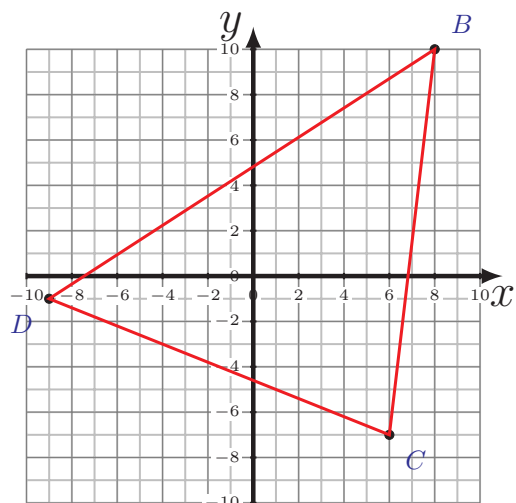


$$\overline{BC} = 10.44 \text{ u}$$

$$\overline{CD} = 17.72 \text{ u} \quad \overline{DB} = 14.87 \text{ u}$$

$$P = 43.03 \text{ u}$$

$$A = 77.5 \text{ u}^2$$



$$\overline{BC} = 17.12 \text{ u}$$

$$\overline{CD} = 16.16 \text{ u} \quad \overline{DB} = 20.25 \text{ u}$$

$$P = 53.53 \text{ u}$$

$$A = 133.5 \text{ u}^2$$