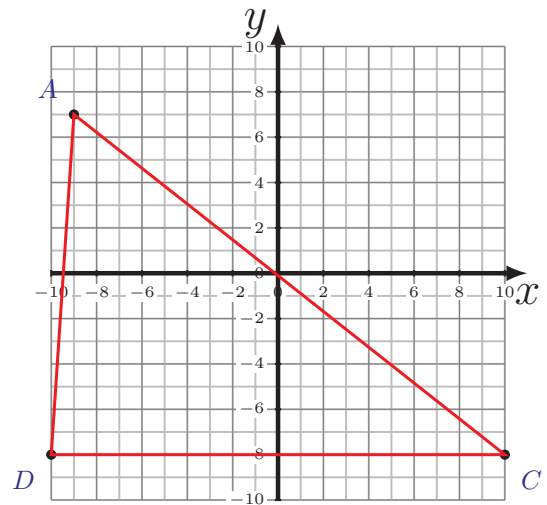
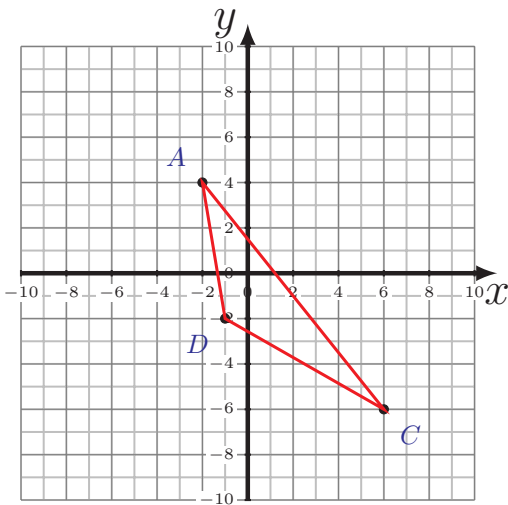
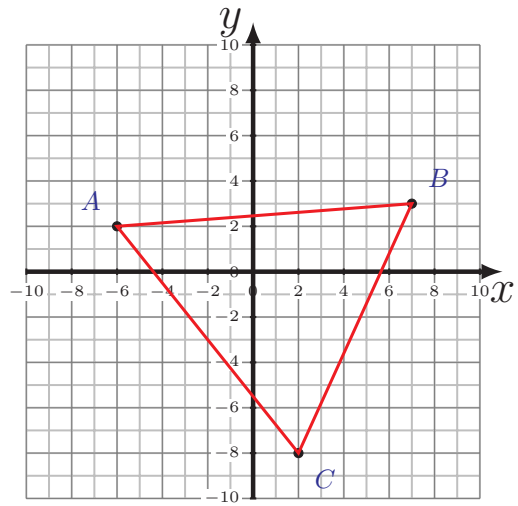
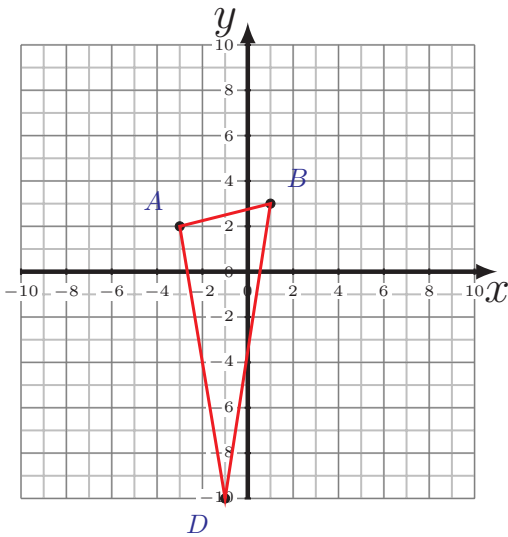


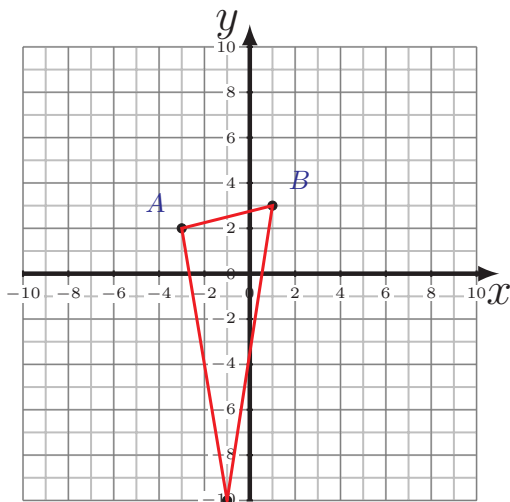
Perimeter and Area of Triangles (E)

Calculate the perimeter and area of each triangle.



Perimeter and Area of Triangles (E) Answers

Calculate the perimeter and area of each triangle.



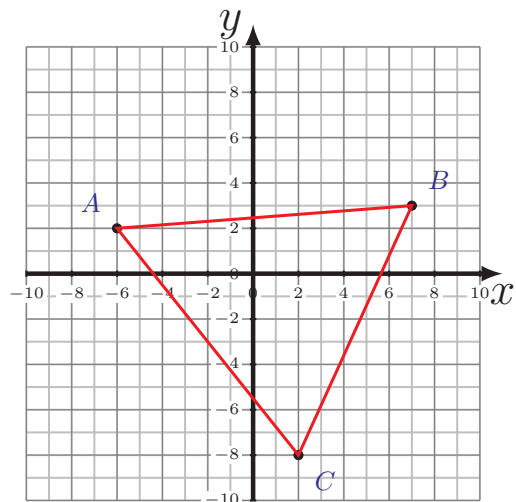
D

$$\overline{AB} = 4.12 \text{ u} \quad \overline{BD} = 13.15 \text{ u}$$

$$\overline{DA} = 12.17 \text{ u}$$

$$P = 29.44 \text{ u}$$

$$A = 25 \text{ u}^2$$

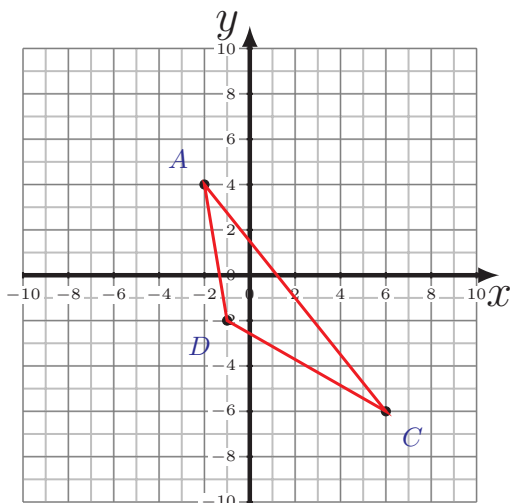


$$\overline{AB} = 13.04 \text{ u} \quad \overline{BC} = 12.08 \text{ u}$$

$$\overline{CA} = 12.81 \text{ u}$$

$$P = 37.93 \text{ u}$$

$$A = 69 \text{ u}^2$$

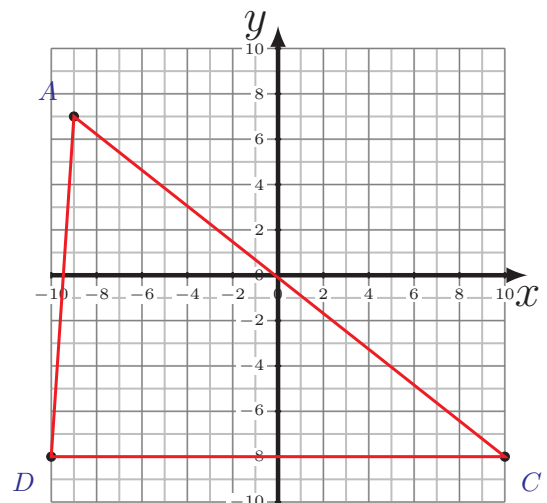


$$\overline{AC} = 12.81 \text{ u}$$

$$\overline{CD} = 8.06 \text{ u} \quad \overline{DA} = 6.08 \text{ u}$$

$$P = 26.95 \text{ u}$$

$$A = 19 \text{ u}^2$$



$$\overline{AC} = 24.21 \text{ u}$$

$$\overline{CD} = 20 \text{ u} \quad \overline{DA} = 15.03 \text{ u}$$

$$P = 59.24 \text{ u}$$

$$A = 150 \text{ u}^2$$