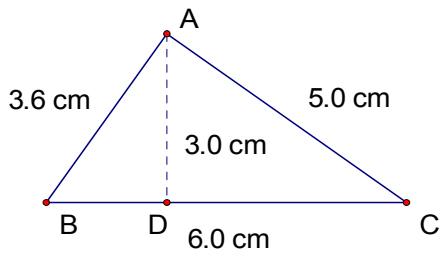
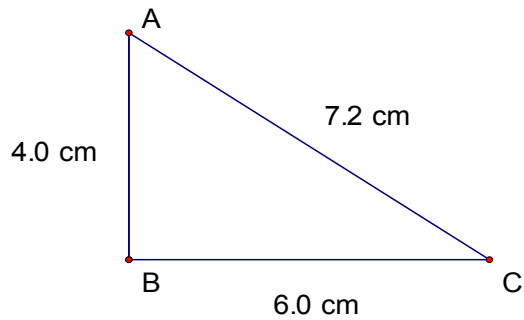
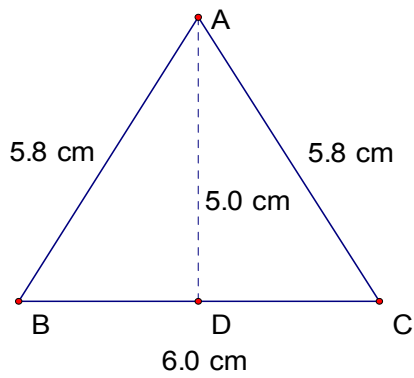
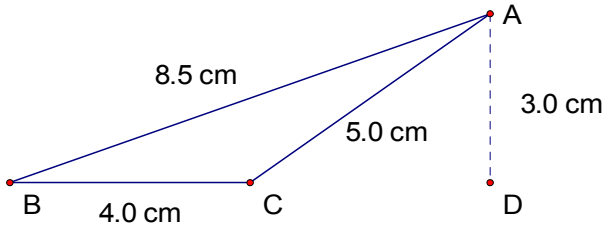


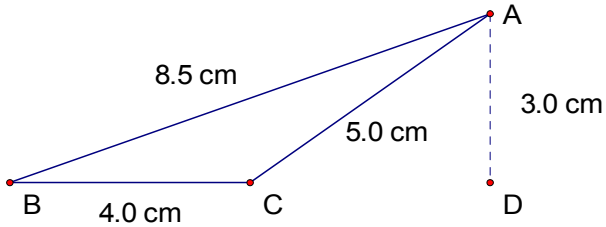
Perimeter and Area of Triangles (B)

Instructions: Calculate the perimeter and area for each triangle below.



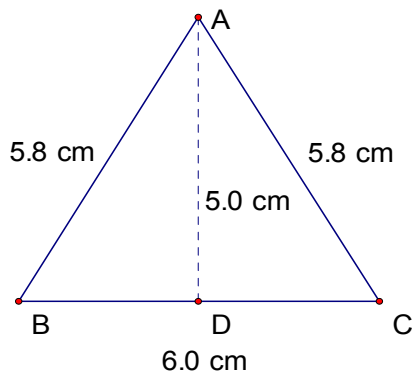
Perimeter and Area of Triangles (B) Answers

Instructions: Calculate the perimeter and area for each triangle below.



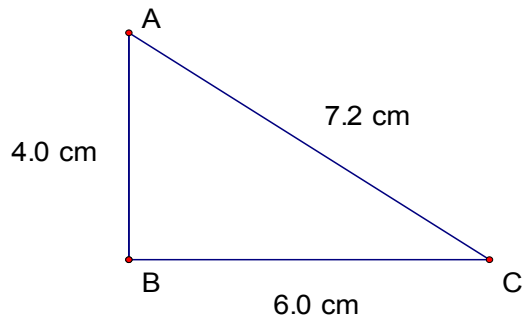
$$\text{Perimeter} = 17.5 \text{ cm}$$

$$\text{Area} = 6.0 \text{ cm}^2$$



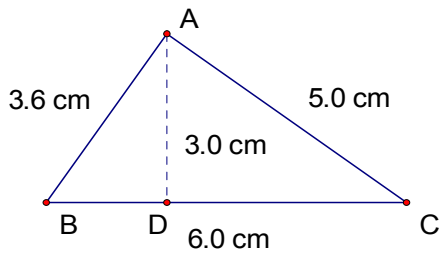
$$\text{Perimeter} = 17.6 \text{ cm}$$

$$\text{Area} = 15 \text{ cm}^2$$



$$\text{Perimeter} = 17.2 \text{ cm}$$

$$\text{Area} = 12.0 \text{ cm}^2$$



$$\text{Perimeter} = 14.6 \text{ cm}$$

$$\text{Area} = 9 \text{ cm}^2$$