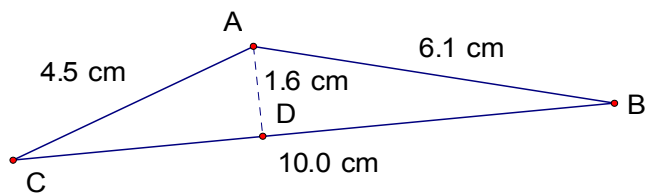
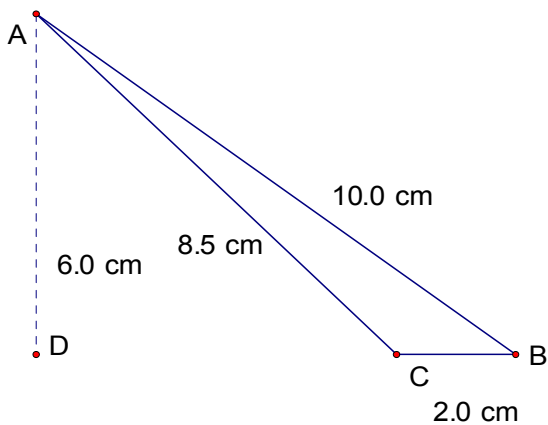
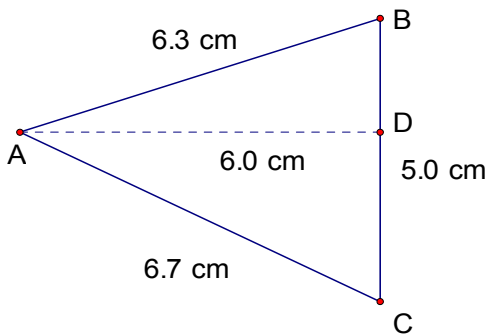
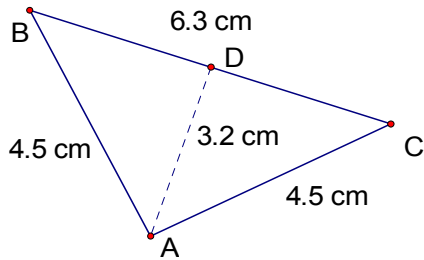


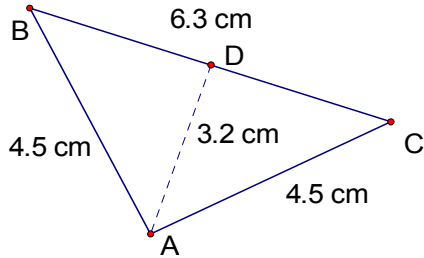
# Perimeter and Area of Triangles (D)

Instructions: Calculate the perimeter and area for each triangle below.



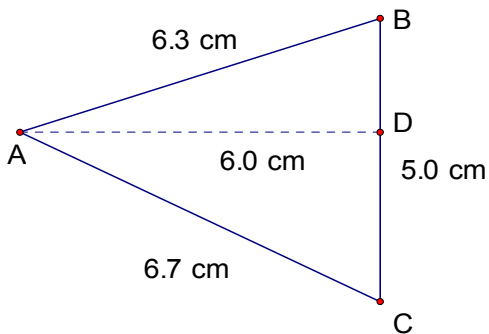
# Perimeter and Area of Triangles (D) Answers

Instructions: Calculate the perimeter and area for each triangle below.



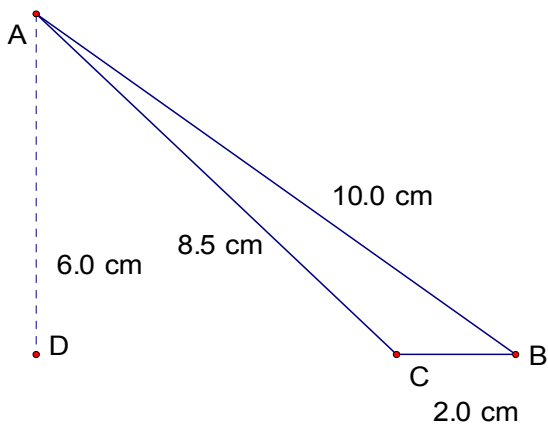
$$\text{Perimeter} = 15.3 \text{ cm}$$

$$\text{Area} = 10.08 \text{ cm}^2$$



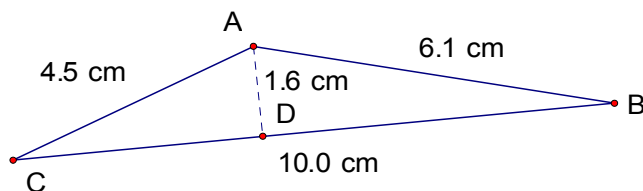
$$\text{Perimeter} = 18 \text{ cm}$$

$$\text{Area} = 15 \text{ cm}^2$$



$$\text{Perimeter} = 20.5 \text{ cm}$$

$$\text{Area} = 6 \text{ cm}^2$$



$$\text{Perimeter} = 20.6 \text{ cm}$$

$$\text{Area} = 8 \text{ cm}^2$$