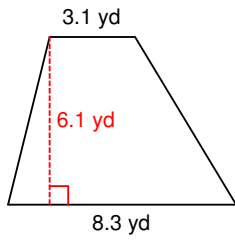
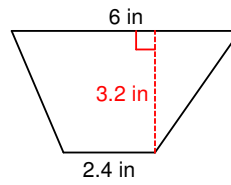


Area of Trapezoids (3)

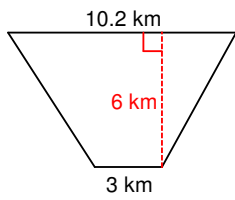
1)



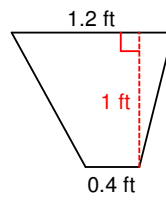
2)



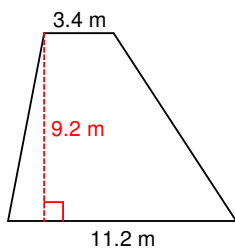
3)



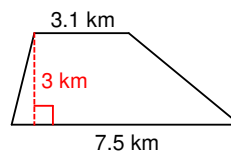
4)



5)

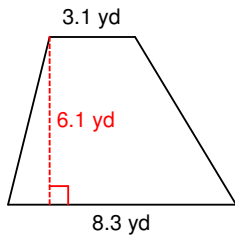


6)



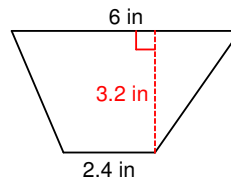
Area of Trapezoids (3) Answers

1)



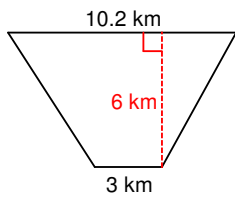
$$34.77 \text{ yd}^2$$

2)



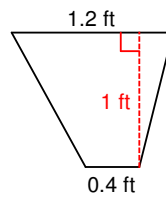
$$13.44 \text{ in}^2$$

3)



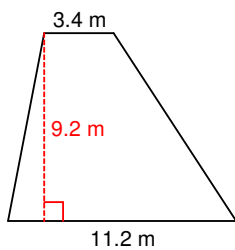
$$39.6 \text{ km}^2$$

4)



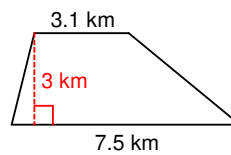
$$0.8 \text{ ft}^2$$

5)



$$67.16 \text{ m}^2$$

6)



$$15.9 \text{ km}^2$$