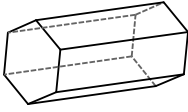
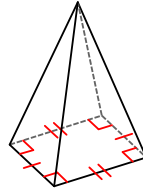


Identifying Three-Dimensional Figures (4)

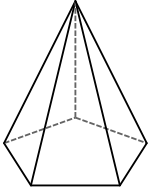
1)



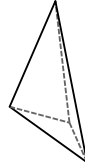
2)



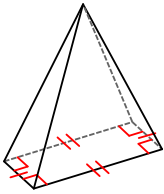
3)



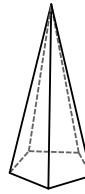
4)



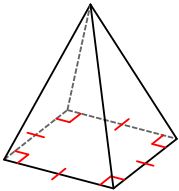
5)



6)



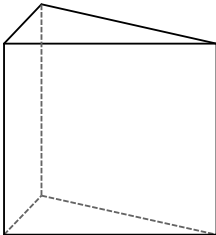
7)



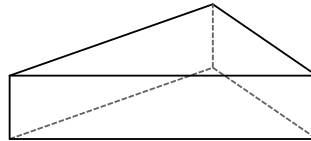
8)



9)

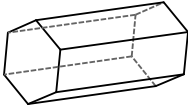


10)



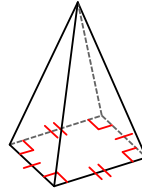
Identifying Three-Dimensional Figures (4) Answers

1)



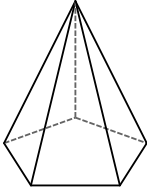
hexagonal prism

2)



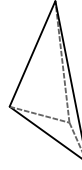
rectangular pyramid

3)



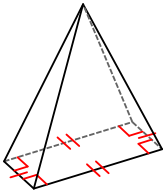
pentagonal pyramid

4)



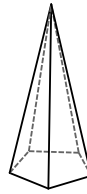
triangular pyramid

5)



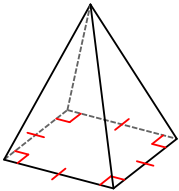
rectangular pyramid

6)



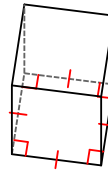
pentagonal pyramid

7)



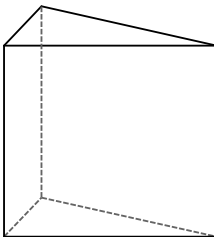
square pyramid

8)



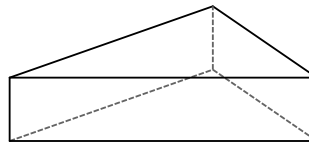
square prism

9)



triangular prism

10)



triangular prism