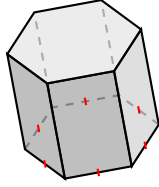
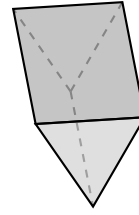
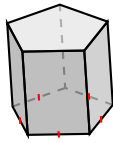


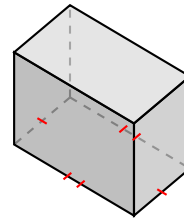
Classifying Prisms (A)

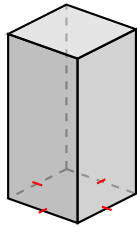
Name each prism based on the shape of its base.

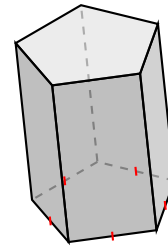


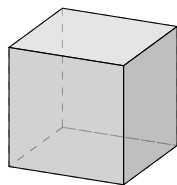


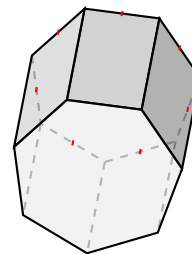






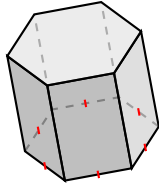




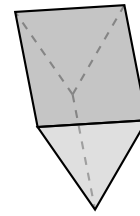


Classifying Prisms (A) Answers

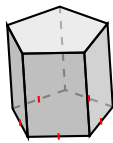
Name each prism based on the shape of its base.



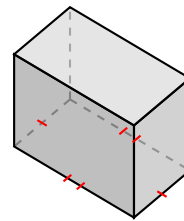
hexagonal prism



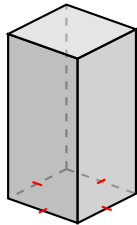
triangular prism



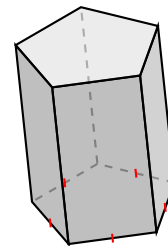
pentagonal prism



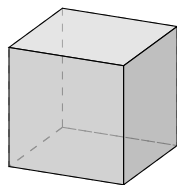
rectangular prism



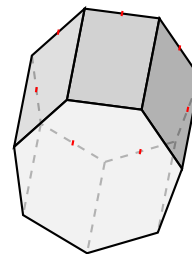
square prism



pentagonal prism



square prism, cube



heptagonal prism