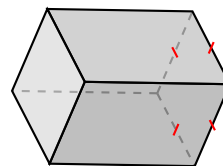
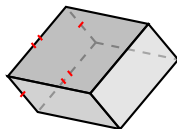
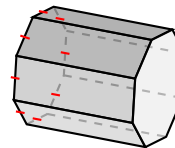
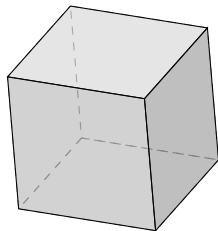
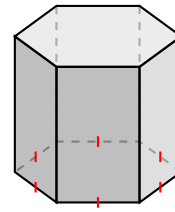
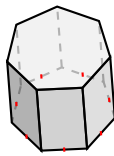
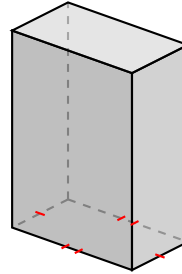
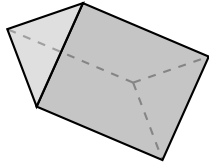


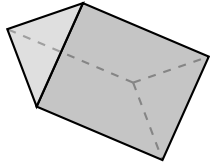
# Classifying Prisms (F)

Name each prism based on the shape of its base.

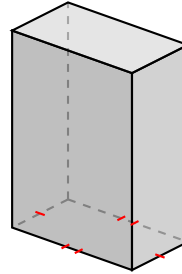


# Classifying Prisms (F) Answers

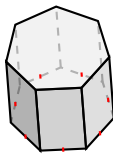
Name each prism based on the shape of its base.



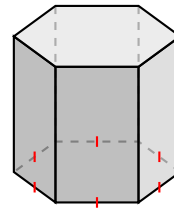
triangular prism



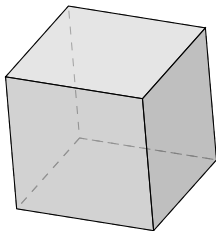
rectangular prism



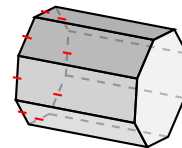
heptagonal prism



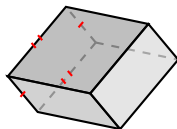
hexagonal prism



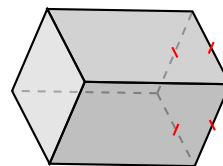
square prism, cube



octagonal prism



rectangular prism



square prism