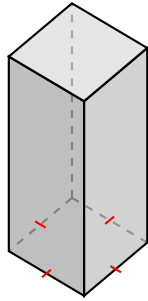
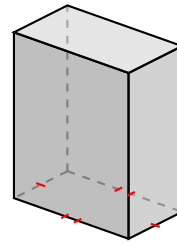
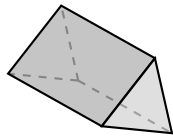


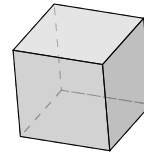
Classifying Prisms (J)

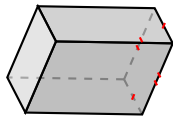
Name each prism based on the shape of its base.

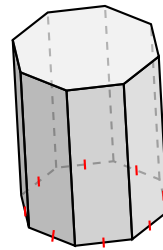


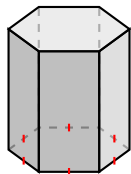


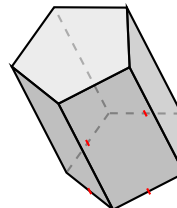






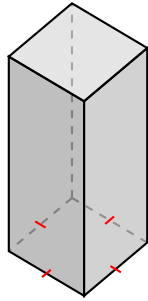




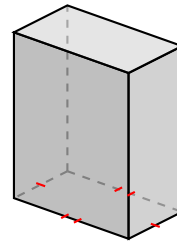


Classifying Prisms (J) Answers

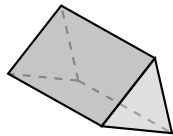
Name each prism based on the shape of its base.



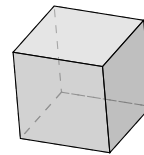
square prism



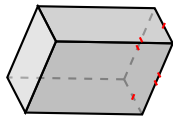
rectangular prism



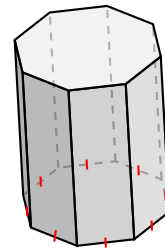
triangular prism



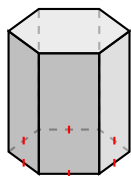
square prism, cube



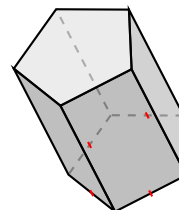
rectangular prism



octagonal prism



hexagonal prism



pentagonal prism