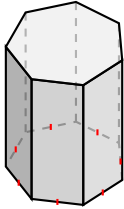
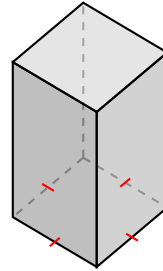


# Classifying Prisms and Pyramids (A)

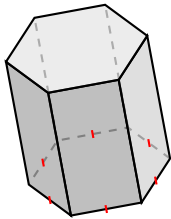
Name each figure based on the shape of its base.



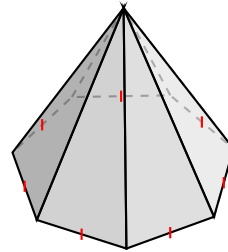
\_\_\_\_\_



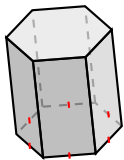
\_\_\_\_\_



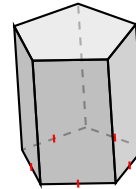
\_\_\_\_\_



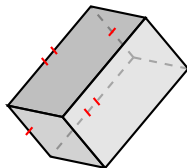
\_\_\_\_\_



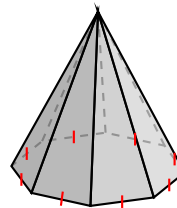
\_\_\_\_\_



\_\_\_\_\_



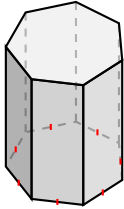
\_\_\_\_\_



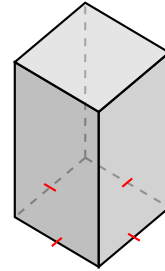
\_\_\_\_\_

# Classifying Prisms and Pyramids (A) Answers

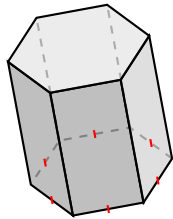
Name each figure based on the shape of its base.



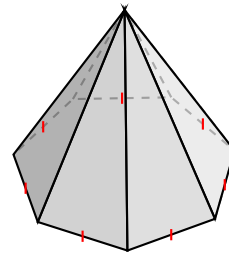
heptagonal prism



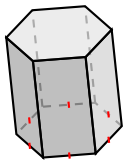
square prism



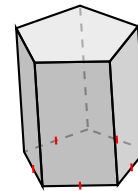
hexagonal prism



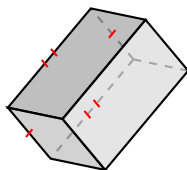
heptagonal pyramid



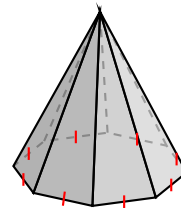
hexagonal prism



pentagonal prism



rectangular prism



octagonal pyramid