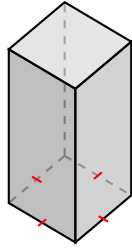
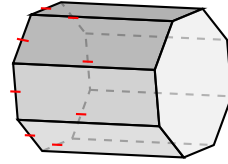
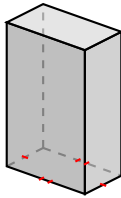


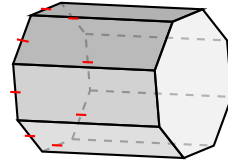
Classifying Prisms and Pyramids (E)

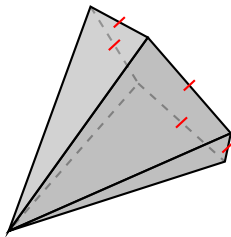
Name each figure based on the shape of its base.

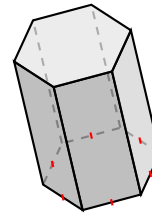


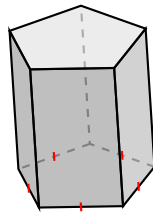


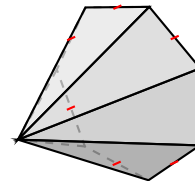






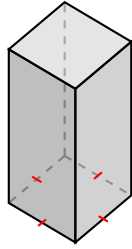




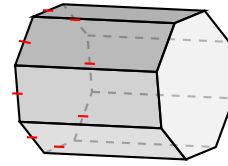


Classifying Prisms and Pyramids (E) Answers

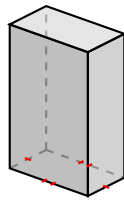
Name each figure based on the shape of its base.



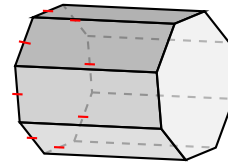
square prism



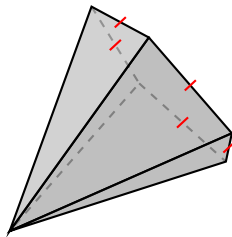
octagonal prism



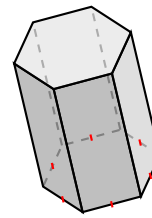
rectangular prism



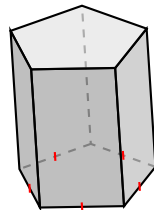
octagonal prism



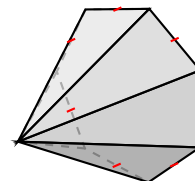
pentagonal pyramid



hexagonal prism



pentagonal prism



heptagonal pyramid