

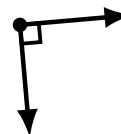
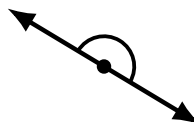
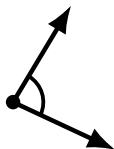
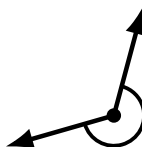
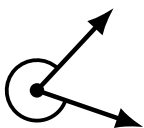
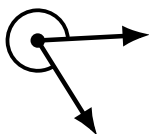
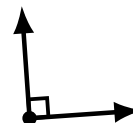
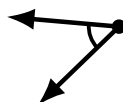
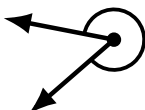
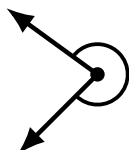

## Identifying Angle Types (B)

Name: \_\_\_\_\_

Date: \_\_\_\_\_

Score: \_\_\_\_\_

Identify each angle as acute, obtuse, right, straight or reflex.




## Identifying Angle Types (B) Answers

Name: \_\_\_\_\_

Date: \_\_\_\_\_

Score: \_\_\_\_\_

Identify each angle as acute, obtuse, right, straight or reflex.



obtuse



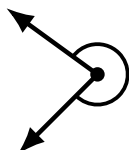
acute



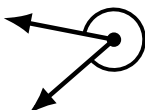
obtuse



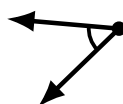
acute



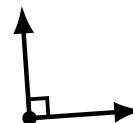
reflex



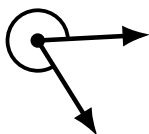
reflex



acute



right



reflex




obtuse



obtuse



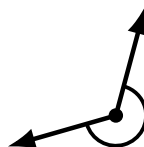
obtuse



reflex



straight



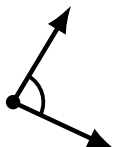
reflex



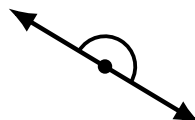
acute



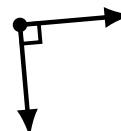
obtuse



acute



straight



right