

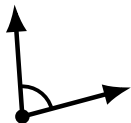
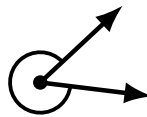
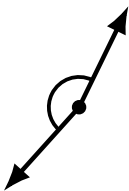
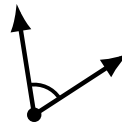
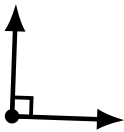
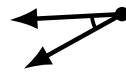
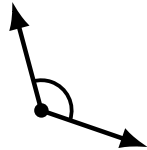
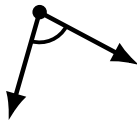
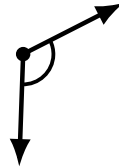
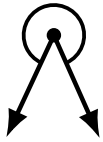
Identifying Angle Types (C)

Name: _____

Date: _____

Score: _____

Identify each angle as acute, obtuse, right, straight or reflex.



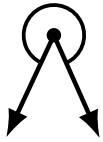
Identifying Angle Types (C) Answers

Name: _____

Date: _____

Score: _____

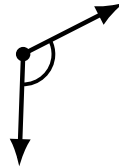
Identify each angle as acute, obtuse, right, straight or reflex.



reflex



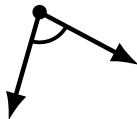
reflex



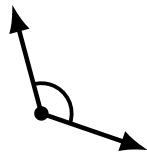
obtuse



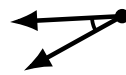
straight



acute



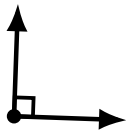
obtuse



acute



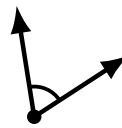
obtuse



right



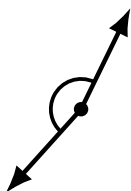
reflex



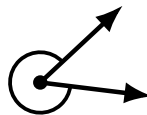
acute



right



obtuse



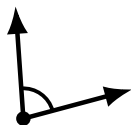
reflex



obtuse



obtuse



acute



acute



reflex



straight