

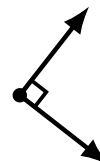
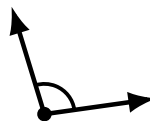
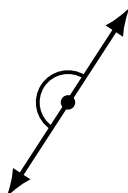

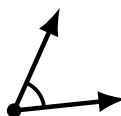
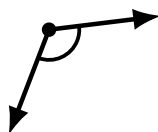
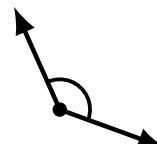

Identifying Angle Types (E)

Name: _____

Date: _____

Score: _____

Identify each angle as acute, obtuse, right, straight or reflex.



Identifying Angle Types (E) Answers

Name: _____

Date: _____

Score: _____

Identify each angle as acute, obtuse, right, straight or reflex.



straight




acute




acute



reflex



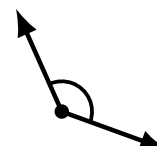
reflex



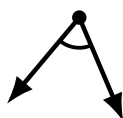
reflex



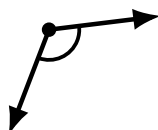
obtuse



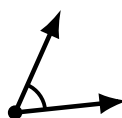
obtuse



acute




obtuse



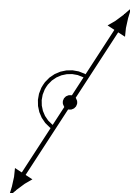
acute



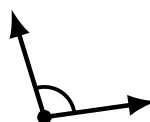
obtuse



reflex



straight



obtuse



obtuse



right



reflex



acute



right