

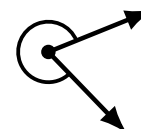
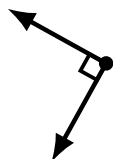
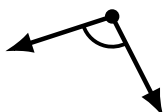
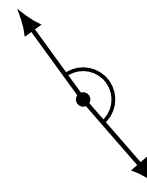
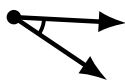
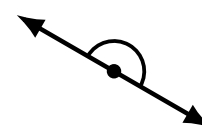
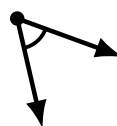
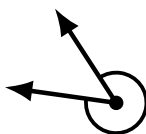
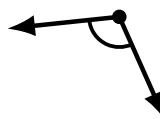

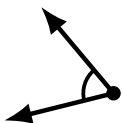
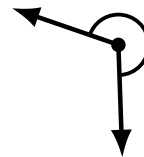
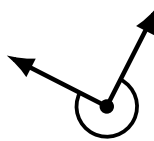
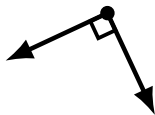
Identifying Angle Types (F)

Name: _____

Date: _____

Score: _____

Identify each angle as acute, obtuse, right, straight or reflex.



Identifying Angle Types (F) Answers

Name: _____

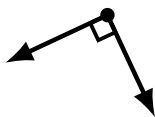
Date: _____

Score: _____

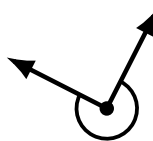
Identify each angle as acute, obtuse, right, straight or reflex.



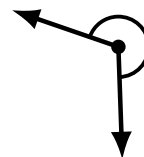
reflex



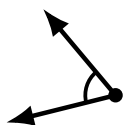
right




reflex



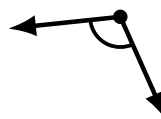
reflex



acute



acute



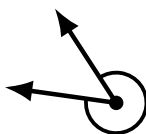
obtuse




acute



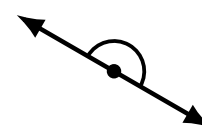
straight



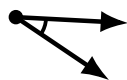
reflex



acute



straight



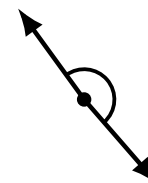
acute



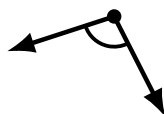
obtuse



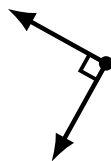
obtuse



obtuse



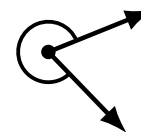
obtuse



right



obtuse



reflex