


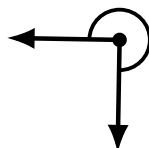
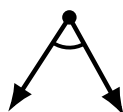
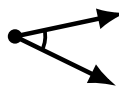
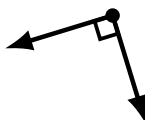
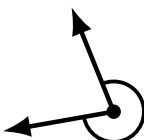
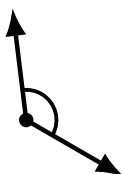
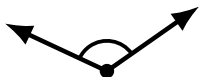
Identifying Angle Types (G)

Name: _____

Date: _____

Score: _____

Identify each angle as acute, obtuse, right, straight or reflex.



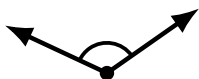
Identifying Angle Types (G) Answers

Name: _____

Date: _____

Score: _____

Identify each angle as acute, obtuse, right, straight or reflex.



obtuse



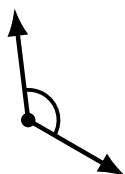
reflex



reflex



straight



obtuse



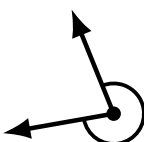
obtuse



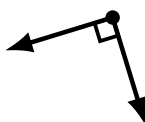
acute



obtuse



reflex



right



right



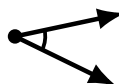
straight



obtuse



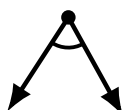
acute



acute



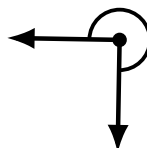
acute



acute



obtuse



reflex



reflex