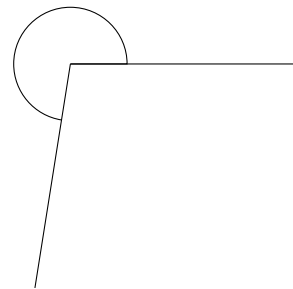
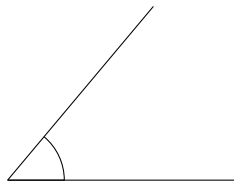
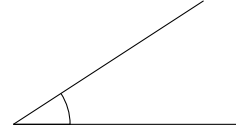
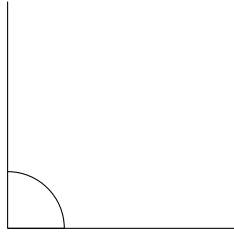


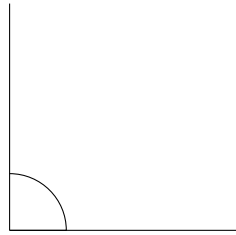
Naming Angles (G)

Name each angle as acute, right, obtuse, straight or reflex.

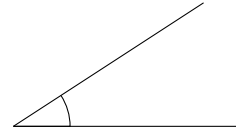


Naming Angles (G) Answers

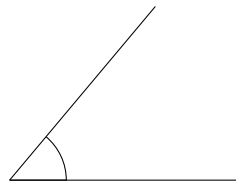
Name each angle as acute, right, obtuse, straight or reflex.



right



acute



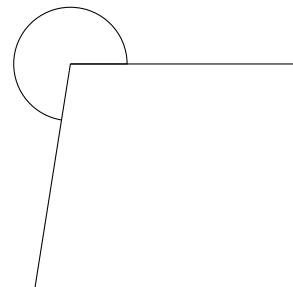
acute



obtuse



straight



reflex