

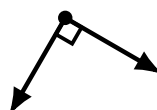

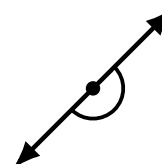
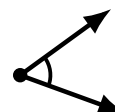
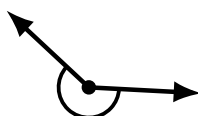
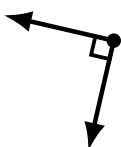

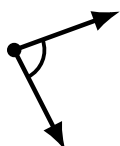
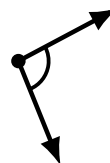
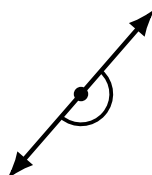

Identifying Angle Types (I)

Name: _____

Date: _____

Score: _____

Identify each angle as acute, obtuse, right, straight or reflex.



Identifying Angle Types (I) Answers

Name: _____

Date: _____

Score: _____

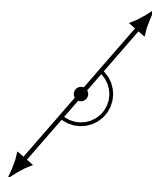
Identify each angle as acute, obtuse, right, straight or reflex.



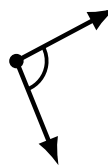
reflex



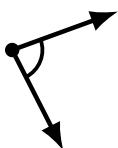
obtuse



straight




obtuse



acute



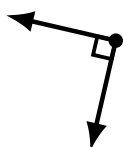
obtuse



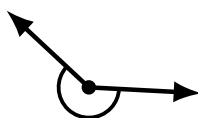
reflex



reflex



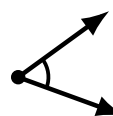
right



reflex



acute



acute



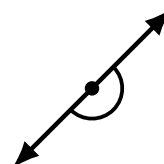
obtuse



acute




obtuse



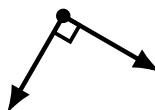
straight



obtuse



reflex



right



acute