

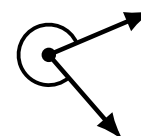
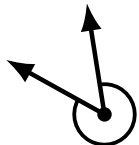
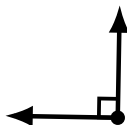
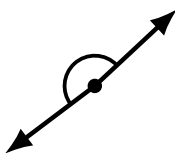
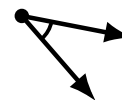

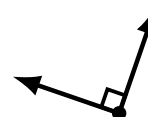
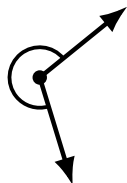
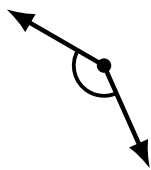
Identifying Angle Types (J)

Name: _____

Date: _____

Score: _____

Identify each angle as acute, obtuse, right, straight or reflex.



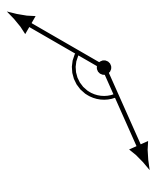
Identifying Angle Types (J) Answers

Name: _____

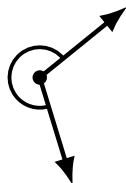
Date: _____

Score: _____

Identify each angle as acute, obtuse, right, straight or reflex.



obtuse



reflex



straight



acute



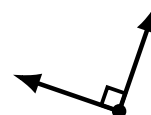
obtuse



acute



obtuse



right



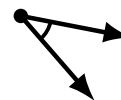
obtuse



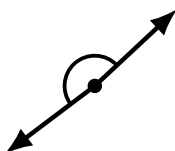
acute



obtuse



acute



obtuse



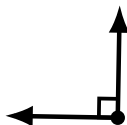
acute



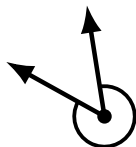
straight



reflex



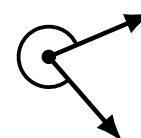
right



reflex



reflex



reflex