


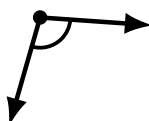
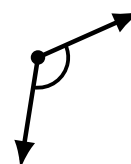


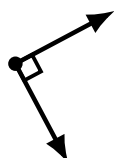
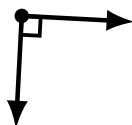
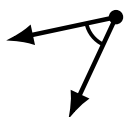
# Identifying Angle Types (A)

Name: \_\_\_\_\_

Date: \_\_\_\_\_

Score: \_\_\_\_\_

Identify each angle as acute, obtuse or right.



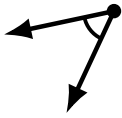
# Identifying Angle Types (A) Answers

Name: \_\_\_\_\_

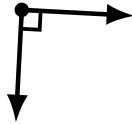
Date: \_\_\_\_\_

Score: \_\_\_\_\_

Identify each angle as acute, obtuse or right.



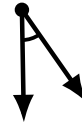
acute



right



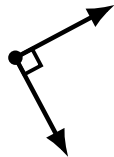
obtuse



acute



obtuse



right



obtuse



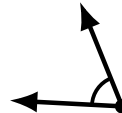
acute



acute




obtuse



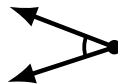
acute



acute



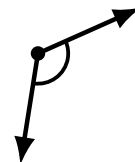
acute



acute



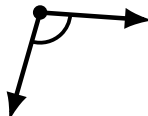
obtuse




obtuse



obtuse



obtuse



obtuse



acute