

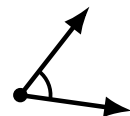
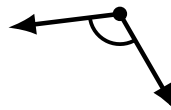
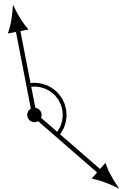
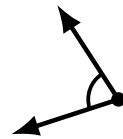
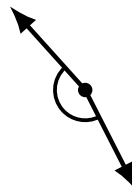
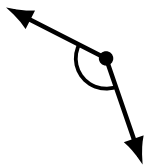
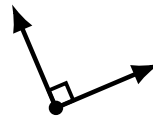
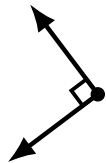
Identifying Angle Types (B)

Name: _____

Date: _____

Score: _____

Identify each angle as acute, obtuse or right.



Identifying Angle Types (B) Answers

Name: _____

Date: _____

Score: _____

Identify each angle as acute, obtuse or right.



acute



acute



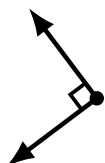
obtuse



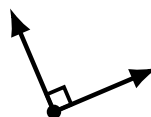
acute



obtuse



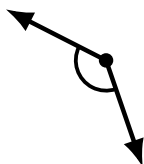
right



right



acute



obtuse



acute



acute



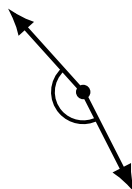
obtuse



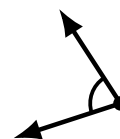
acute



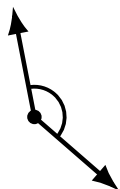
obtuse



obtuse



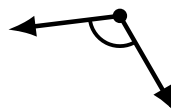
acute




obtuse



obtuse



obtuse



acute