

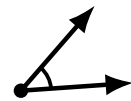
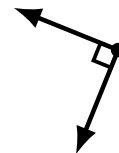
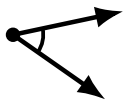
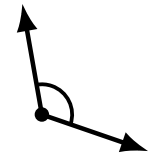
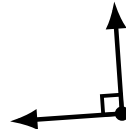
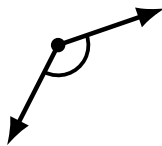
Identifying Angle Types (C)

Name: _____

Date: _____

Score: _____

Identify each angle as acute, obtuse or right.



Identifying Angle Types (C) Answers

Name: _____

Date: _____

Score: _____

Identify each angle as acute, obtuse or right.



obtuse



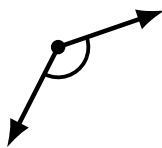
obtuse



acute



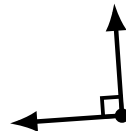
acute



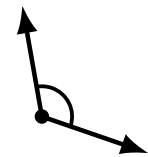
obtuse



obtuse



right



obtuse



obtuse



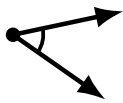
obtuse



acute



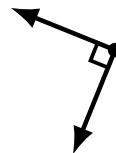
acute



acute



acute



right



acute



obtuse



acute



acute



obtuse