

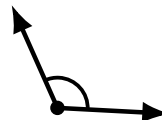
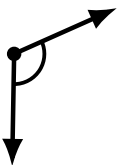
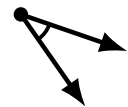
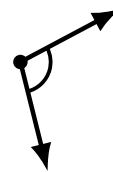
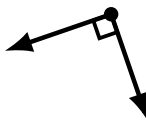
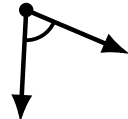
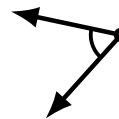
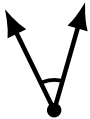
# Identifying Angle Types (D)

Name: \_\_\_\_\_

Date: \_\_\_\_\_

Score: \_\_\_\_\_

Identify each angle as acute, obtuse or right.



# Identifying Angle Types (D) Answers

Name: \_\_\_\_\_

Date: \_\_\_\_\_

Score: \_\_\_\_\_

Identify each angle as acute, obtuse or right.



obtuse



obtuse



acute



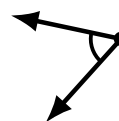
acute



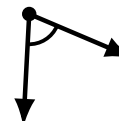
acute



acute



acute



acute



obtuse



acute



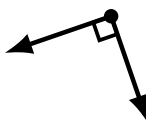
acute



obtuse



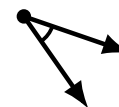
obtuse



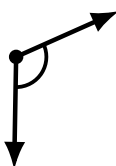
right



obtuse



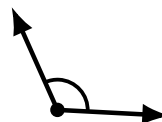
acute



obtuse



obtuse



obtuse



right