

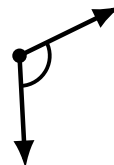
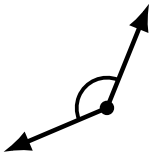
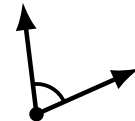
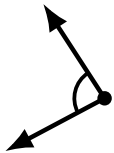
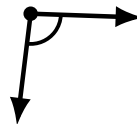
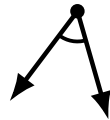
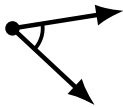
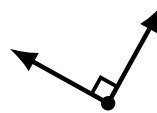
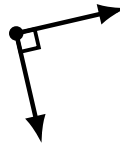
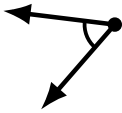
Identifying Angle Types (E)

Name: _____

Date: _____

Score: _____

Identify each angle as acute, obtuse or right.



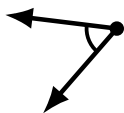
Identifying Angle Types (E) Answers

Name: _____

Date: _____

Score: _____

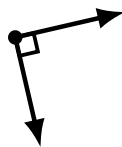
Identify each angle as acute, obtuse or right.



acute



acute



right



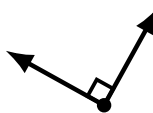
obtuse



obtuse



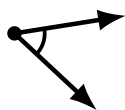
acute



right



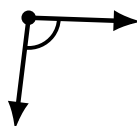
acute



acute



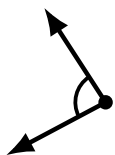
acute



obtuse



obtuse



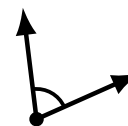
acute



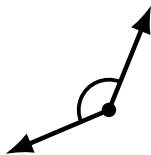
obtuse



acute




acute



obtuse



obtuse



obtuse



obtuse