

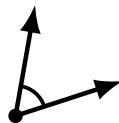
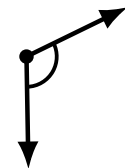
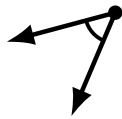
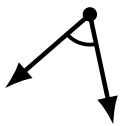
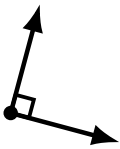
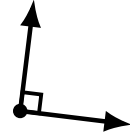
Identifying Angle Types (G)

Name: _____

Date: _____

Score: _____

Identify each angle as acute, obtuse or right.



Identifying Angle Types (G) Answers

Name: _____

Date: _____

Score: _____

Identify each angle as acute, obtuse or right.



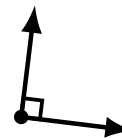
obtuse



acute



acute



right



obtuse



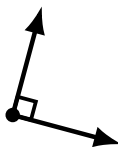
obtuse



obtuse



acute



right



obtuse



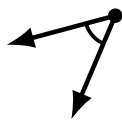
obtuse



acute



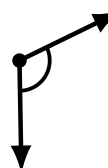
acute



acute



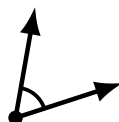
acute



obtuse



obtuse



acute



acute



obtuse