

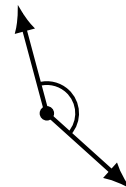
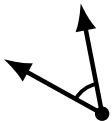
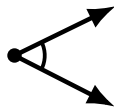
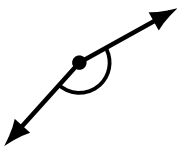
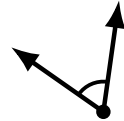
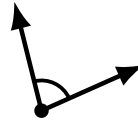
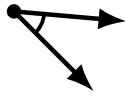
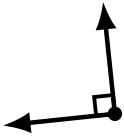
Identifying Angle Types (H)

Name: _____

Date: _____

Score: _____

Identify each angle as acute, obtuse or right.



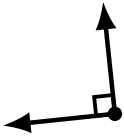
Identifying Angle Types (H) Answers

Name: _____

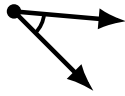
Date: _____

Score: _____

Identify each angle as acute, obtuse or right.



right



acute



acute



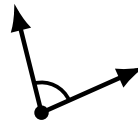
acute



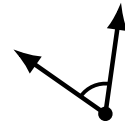
obtuse



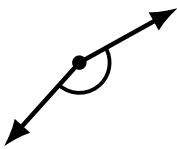
obtuse



acute



acute



obtuse



acute



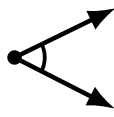
obtuse



obtuse



acute



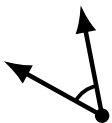
acute



obtuse



obtuse




acute



obtuse



right



obtuse