

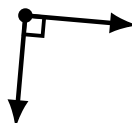
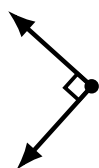
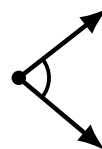
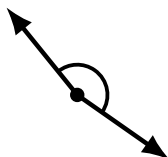
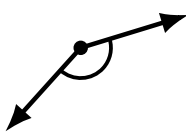
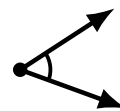
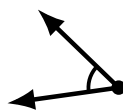
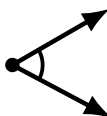
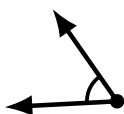
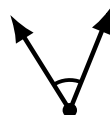
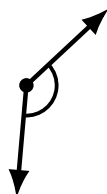
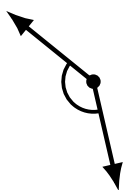
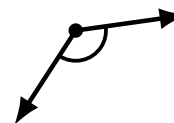
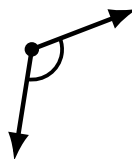
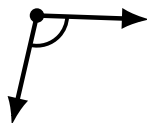
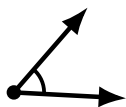
Identifying Angle Types (J)

Name: _____

Date: _____

Score: _____

Identify each angle as acute, obtuse or right.



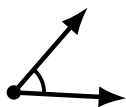
Identifying Angle Types (J) Answers

Name: _____

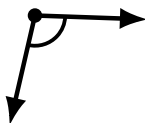
Date: _____

Score: _____

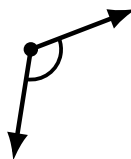
Identify each angle as acute, obtuse or right.



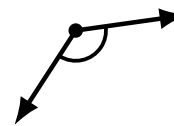
acute



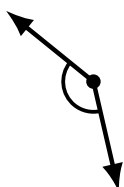
obtuse



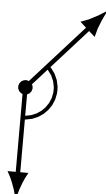
obtuse



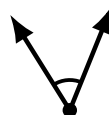
obtuse



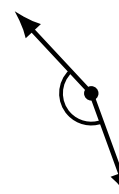
obtuse



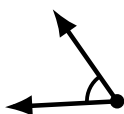
obtuse



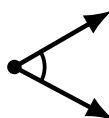
acute



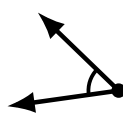
obtuse



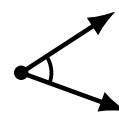
acute




acute



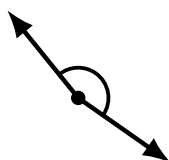
acute



acute



obtuse



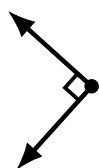
obtuse



acute



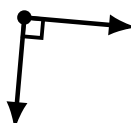
acute



right



obtuse



right



acute