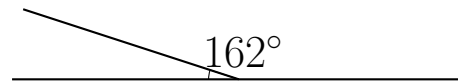
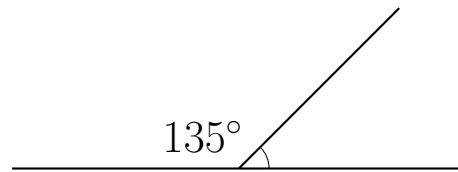
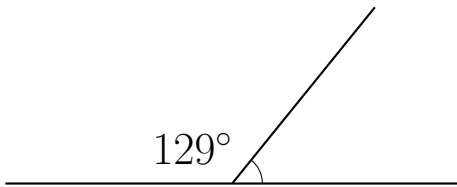


## Supplementary Angles (A)

Find the supplementary angle measurement for each measured angle.



## Supplementary Angles (A) Answers

Find the supplementary angle measurement for each measured angle.

