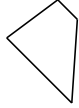
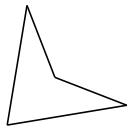


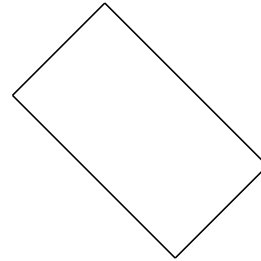
Classifying Quadrilaterals (C)

Identify each quadrilateral.

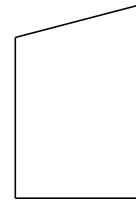


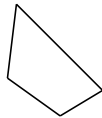



















Classifying Quadrilaterals (C) Answers

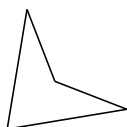
Identify each quadrilateral.



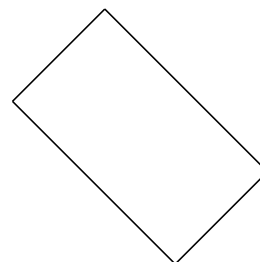
trapezoid



isosceles trapezoid



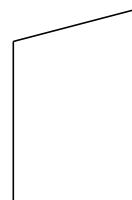
dart



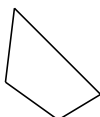
rectangle



dart




right-angled trapezoid



quadrilateral



square



bowtie



rhombus