
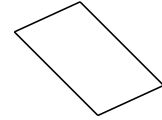
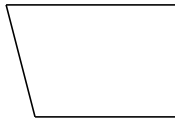


Classifying Quadrilaterals (F)

Identify each quadrilateral.





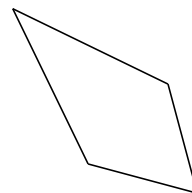


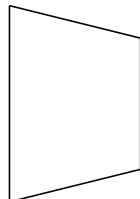













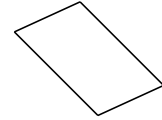


Classifying Quadrilaterals (F) Answers

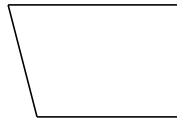
Identify each quadrilateral.



quadrilateral




parallelogram



right-angled trapezoid




trapezoid



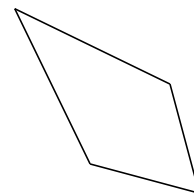
rectangle



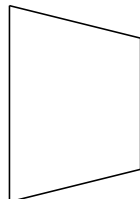
rhombus



rectangle



kite



isosceles trapezoid



dart