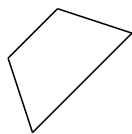
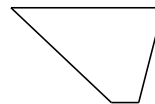
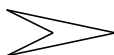


Classifying Quadrilaterals (G)

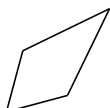
Identify each quadrilateral.

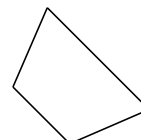


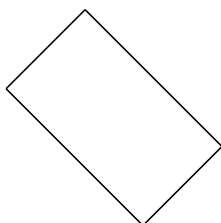






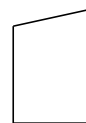






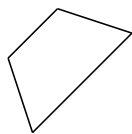




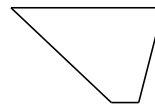


Classifying Quadrilaterals (G) Answers

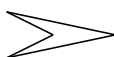
Identify each quadrilateral.



isosceles trapezoid



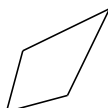
trapezoid



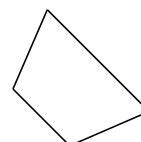
dart



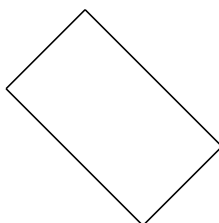
rhombus



kite



isosceles trapezoid



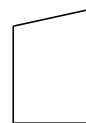
rectangle



parallelogram



bowtie



right-angled trapezoid