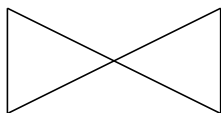


Classifying Quadrilaterals (A)

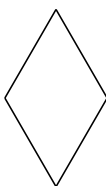
Identify each quadrilateral.

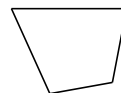




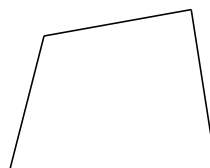




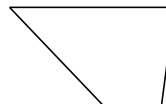












Classifying Quadrilaterals (A) Answers

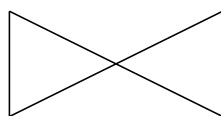
Identify each quadrilateral.



rectangle



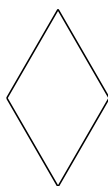
right-angled trapezoid



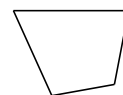
bowtie



isosceles trapezoid



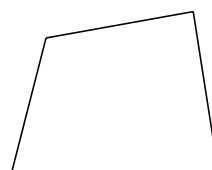
rhombus



quadrilateral



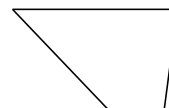
square



quadrilateral



kite



trapezoid