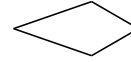
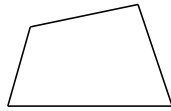


Classifying Quadrilaterals (B)

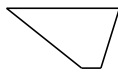
Identify each quadrilateral.

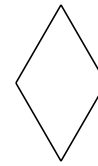







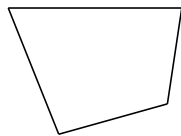












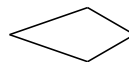


Classifying Quadrilaterals (B) Answers

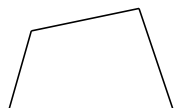
Identify each quadrilateral.



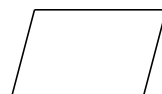
dart



kite



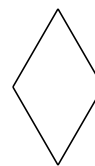
quadrilateral




parallelogram



trapezoid



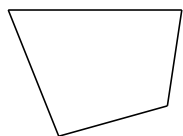
rhombus



square



bowtie



quadrilateral



right-angled trapezoid