


# Classifying Quadrilaterals (D)

Identify each quadrilateral.



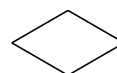
\_\_\_\_\_



\_\_\_\_\_



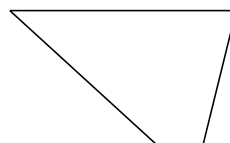
\_\_\_\_\_



\_\_\_\_\_



\_\_\_\_\_



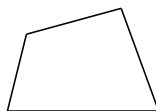
\_\_\_\_\_




\_\_\_\_\_



\_\_\_\_\_




\_\_\_\_\_



\_\_\_\_\_

# Classifying Quadrilaterals (D) Answers

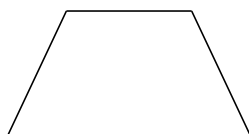
Identify each quadrilateral.



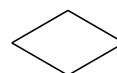
bowtie



square



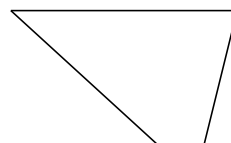
isosceles trapezoid



rhombus



right-angled trapezoid



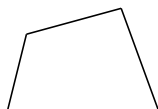
trapezoid




parallelogram



rhombus



quadrilateral



rectangle