
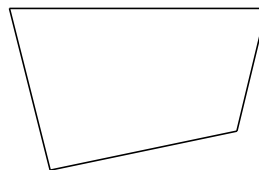


Classifying Quadrilaterals (E)

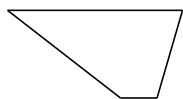
Identify each quadrilateral.




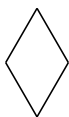


















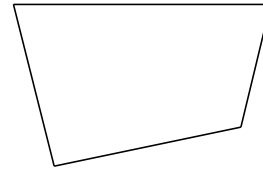


Classifying Quadrilaterals (E) Answers

Identify each quadrilateral.



parallelogram



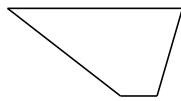
quadrilateral




right-angled trapezoid



dart



trapezoid




bowtie



rhombus



rectangle



square



rectangle