

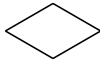


Classifying Quadrilaterals (F)

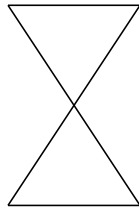
Identify each quadrilateral.



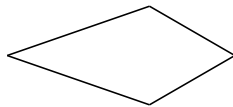




















Classifying Quadrilaterals (F) Answers

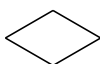
Identify each quadrilateral.



rectangle



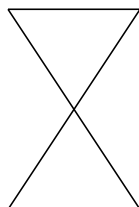
square



rhombus



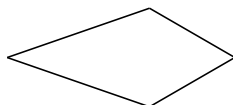
dart



bowtie




rhombus



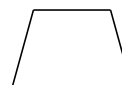
kite



trapezoid



right-angled trapezoid



isosceles trapezoid