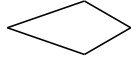
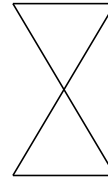


# Classifying Quadrilaterals (H)

Identify each quadrilateral.




\_\_\_\_\_



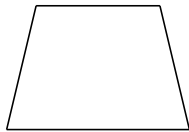
\_\_\_\_\_



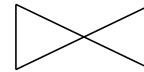
\_\_\_\_\_




\_\_\_\_\_



\_\_\_\_\_



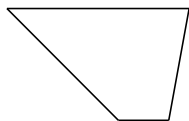
\_\_\_\_\_



\_\_\_\_\_



\_\_\_\_\_



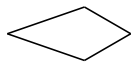
\_\_\_\_\_



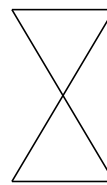
\_\_\_\_\_

# Classifying Quadrilaterals (H) Answers

Identify each quadrilateral.



kite



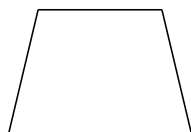
bowtie



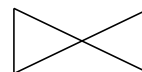
square



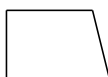
rectangle



isosceles trapezoid



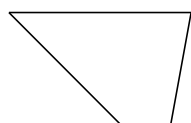
bowtie



right-angled trapezoid



quadrilateral



trapezoid



dart