



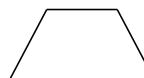
Classifying Quadrilaterals (J)

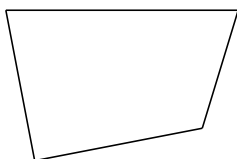
Identify each quadrilateral.

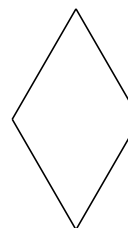




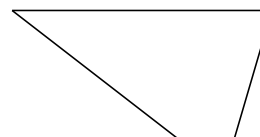


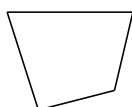


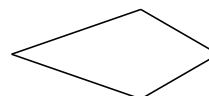













Classifying Quadrilaterals (J) Answers

Identify each quadrilateral.



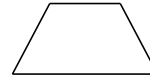
parallelogram



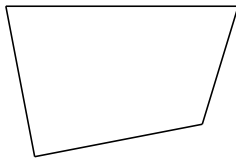
bowtie



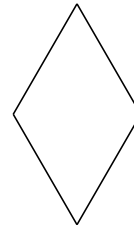
right-angled trapezoid



isosceles trapezoid



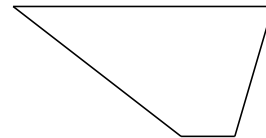
quadrilateral



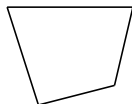
rhombus



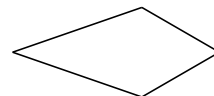
square



trapezoid



quadrilateral



kite